




# flat scale answers

Write the following scales descending using whole notes.


B $\flat$  major scale A musical staff in treble clef showing the descending B $\flat$  major scale with whole notes. The notes are B $\flat$ 4, A4, G4, F4, E4, D4, C4, and B $\flat$ 3.

A $\flat$  major scale A musical staff in treble clef showing the descending A $\flat$  major scale with whole notes. The notes are A $\flat$ 4, G4, F4, E4, D4, C4, B $\flat$ 3, and A $\flat$ 3.

F major scale A musical staff in treble clef showing the descending F major scale with whole notes. The notes are F4, E4, D4, C4, B $\flat$ 3, A3, G3, and F3.

G $\flat$  major scale A musical staff in treble clef showing the descending G $\flat$  major scale with whole notes. The notes are G $\flat$ 4, F4, E4, D4, C4, B $\flat$ 3, A $\flat$ 3, and G $\flat$ 3.

E $\flat$  major scale A musical staff in treble clef showing the descending E $\flat$  major scale with whole notes. The notes are E $\flat$ 4, D4, C4, B $\flat$ 3, A $\flat$ 3, G3, F3, and E $\flat$ 3.

C $\flat$  major scale A musical staff in treble clef showing the descending C $\flat$  major scale with whole notes. The notes are C $\flat$ 4, B $\flat$ 3, A $\flat$ 3, G3, F3, E3, D3, and C $\flat$ 3.

D $\flat$  major scale A musical staff in treble clef showing the descending D $\flat$  major scale with whole notes. The notes are D $\flat$ 4, C4, B $\flat$ 3, A $\flat$ 3, G3, F3, E3, and D $\flat$ 3.