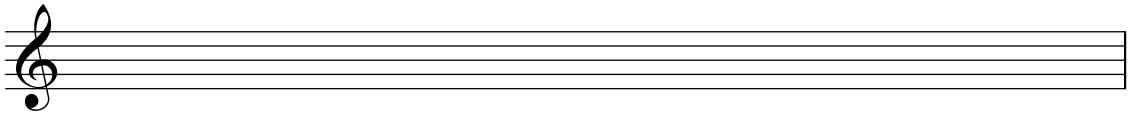



sharp scales with accidentals exercises

Write the following scales by using the 2 tetrachords that form the scale.
Write the scale ascending for one octave using whole notes. Check your work.


A major scale

A musical staff with a treble clef, consisting of five horizontal lines.


B major scale

A musical staff with a treble clef, consisting of five horizontal lines.


F# major scale

A musical staff with a treble clef, consisting of five horizontal lines.


G major scale

A musical staff with a treble clef, consisting of five horizontal lines.


E major scale

A musical staff with a treble clef, consisting of five horizontal lines.

C# major scale

A musical staff with a treble clef, consisting of five horizontal lines.

D major scale

A musical staff with a treble clef, consisting of five horizontal lines.