



**IIT**

---

**KALRASHUKLA**

---

*A Class Apart*

---

**CLASS – 9<sup>th</sup>**

---

Time : 90 minutes

Maximum Marks : 180

---

**-: Important Instructions :-**

- (i) Use only Black Ball Point pen.
- (ii) This test booklet contains 3 Sections of question paper consisting of
  - SECTION - I → SCIENCE (15 Questions)
  - SECTION - II → MATHEMATICS (15 Questions)
  - SECTION - III → MENTAL ABILITY & REASONING (15 Questions)
- (iii) Each question is allotted **4 marks for correct response**.
- (iv) **1 mark will be deducted** for marking incorrect or multiple responses.
- (v) No deduction will be made from total marks for unattempted questions.
- (vi) For each question, there is **only 1 correct** response.

Name of Student (in Capital Letter) : \_\_\_\_\_

Candidate Signature : \_\_\_\_\_

Invigilator Signature : \_\_\_\_\_

**SECTION - I****SCIENCE**

1. A one inch tall candle is placed three inches from a concave spherical mirror having a one-foot radius of curvature then magnification of resulting image will be (1 foot – 12 inch)  
(A) +2                      (B) 3                      (C) – 2                      (D) – 3
2. If air resistance (resistance opposite to direction of motion) is not ignored, then maximum height attained by body will be if it is thrown upward with a velocity of  $\sqrt{2(g + a)}$  m/s, where a is air resistance in m/sec<sup>2</sup>(i.e. resistance offered by air)  
(A)  $\frac{1}{2}$  m                      (B) 1m                      (C) 2m                      (D) 4 m
3. Why the dam of water reservoir is thick at the bottom  
(A) Quantity of water increases with depth  
(B) Density of water increases with depth  
(C) Pressure of water increases with depth  
(D) Temperature of water increases with depth
4. A planet is 4 times far away than the earth from the sun. Then number of earth days in the year of this planet is  
(A) 2920 days                      (B) 365 days                      (C) 730 days                      (D) 1095 days
5. What will be the wave velocity, if the radar gives 54 waves per min and wavelength of the given wave is 10 m  
(A) 4m/sec                      (B) 6 m/sec                      (C) 9 m/sec                      (D) 5 m/sec

---

*Space for Rough Work*

6. Which of the following metals will not be able to produce hydrogen gas on reacting with alkali solution.  
(A) Zn (B) Sn (C) Al (D) Fe
7.  $87\text{cm}^3$  of moist nitrogen is measured at  $90^\circ\text{C}$  and  $659\text{ mm Hg}$  pressure. Find the volume of dry nitrogen at N.T.P. (The vapour pressure of water at  $90^\circ\text{C}$  is  $9\text{mm Hg}$ ).  
(A)  $68.6\text{ cm}^3$  (B)  $74.4\text{ cm}^3$  (C)  $60.03\text{ cm}^3$  (D)  $78.00\text{ m}^3$
8. Which of the following separation technique is applicable only for separating miscible liquid-liquid mixture.  
(A) Filtration (B) Crystallization (C) Distillation (D) Evaporation
9. Zinc reacts with dilute nitric acid to give zinc nitrate, nitrous oxide and water, according to following reaction.  
 $a\text{Zn} + b\text{HNO}_3 \rightarrow c\text{Zn}(\text{NO}_3)_2 + d\text{N}_2\text{O} + e\text{H}_2\text{O}$  find the value of  $\left\{ \frac{a+b+c+d+e+6}{10} \right\} = ?$   
(A) 1 (B) 3 (C) 2 (D) 4
10. Which of the following is not a green house gas.  
(A) Carbon dioxide (B) Hydrogen (C) Water vapour (D) Methane.
11. A plant cell differs from an animal cell in the absence of  
(A) Endoplasmic reticulum (B) Mitochondria  
(C) Ribosomes (D) Centrioles
12. Synapse is  
(A) Junction of two axons (B) Junction of two dendrites  
(C) Junction of axon and dendrite (D) Junction of cell bodies
13. Algae can be described as  
(A) Autotrophic and photosynthetic (B) Autotrophic and chemosynthetic  
(C) Heterotrophic and photosynthetic (D) Heterotrophic and chemosynthetic
14. Unicellular eukaryotic organisms are included in  
(A) Monera (B) Protista (C) Fungi (D) Plantae
15. Dengue is caused by  
(A) Fungi (B) Bacteria (C) Virus (D) Protozoa

---

*Space for Rough Work*

**SECTION - II****MATHEMATICS**

16. The surds  $\sqrt{2}\sqrt[3]{3}$  and  $\sqrt[5]{5}$ , in their descending order are :  
 (A)  $\sqrt[3]{3}, \sqrt[5]{5}, \sqrt{2}$  (B)  $\sqrt{2}, \sqrt[3]{3}, \sqrt[5]{5}$  (C)  $\sqrt{2}, \sqrt[5]{5}, \sqrt[3]{3}$  (D)  $\sqrt[3]{3}, \sqrt{2}, \sqrt[5]{5}$
17.  $\left[ \frac{(32)^{0.2} + (81)^{0.25}}{(256)^{0.5} - (121)^{0.5}} \right] =$   
 (A) 2 (B) 5 (C) 1 (D) 11
18.  $\sqrt{x}\sqrt[2]{2^x}\sqrt[3]{3^{x^3}}\sqrt[4]{4^x}\sqrt[5]{5^{x^5}} =$   
 (A) 18 (B) 54 (C) 24 (D) 36
19. If  $(x+1)(x+2)(x+3)(x+k)+1$  is a perfect square then the value of k is:  
 (A) 4 (B) 5 (C) 6 (D) 7
20. The remainder when  $x^{45}$  is divided by  $x^2 - 1$  is :  
 (A)  $2x$  (B)  $-x$  (C) 0 (D)  $x$
21. If  $\alpha$  and  $\beta$  are the roots of the equation  $3x^2 - 2x - 8 = 0$  then  $\alpha^2 - \alpha\beta + \beta^2 =$   
 (A)  $\frac{76}{9}$  (B)  $\frac{19}{6}$  (C)  $\frac{16}{6}$  (D)  $\frac{-19}{6}$
22. The mean of first n odd natural numbers is  $\frac{n^2}{81}$  find n.  
 (A) 9 (B) 81 (C) 27 (D) 243
23. Year X is not a leap year. Find the probability of X containing exactly 53 Sundays.  
 (A)  $\frac{1}{7}$  (B)  $\frac{2}{7}$  (C)  $\frac{3}{7}$  (D)  $\frac{1}{17}$

*Space for Rough Work*

24. Find each interior and exterior angle of a regular polygon having 30 sides :  
 (A)  $144^\circ, 36^\circ$  (B)  $156^\circ, 24^\circ$  (C)  $164^\circ, 16^\circ$  (D)  $168^\circ, 12^\circ$
25. In the given figure P, Q, R and S are concyclic points and O is the midpoint of the diameter QS if  $\angle QPR = 25^\circ$  then find  $\angle SOR$ .  
 (A)  $130^\circ$  (B)  $120^\circ$  (C)  $75^\circ$  (D)  $100^\circ$
26. A solid hemisphere of radius 8 cm is melted and recast into X spheres of radius 2 cm each, find X  
 (A) 4 (B) 8 (C) 16 (D) 32
27. The equation of the diagonal AC of a square ABCD is  $3x + 4y + 12 = 0$ , find the equation of BD where D is (2, -3)  
 (A)  $4x - 3y - 8 = 0$  (B)  $4x - 3y - 17 = 0$  (C)  $4x - 3y + 17 = 0$  (D)  $4x + 3y - 17 = 0$
28. How many pairs of x and y satisfy the equations  $2x + 4y = 8$  and  $6x + 12y = 24$ ?  
 (A) 0 (B) 1 (C) Infinite (D) 2
29. In a race, Ram beats Shyam by 30m, in the same race Shyam beats Tarun by 60 m, while Ram beats Tarun by 84 m. Find the length of the race (in meter).  
 (A) 360 (B) 270 (C) 300 (D) 450
30. From each corner of a square sheet of side 10 cm, a square of side s cm is cut, where s is an integer. The remaining sheet is folded into a cuboid of volume C cubic cm. Which of the following cannot be a value of C?  
 (A) 64 (B) 72 (C) 48 (D) 30




---

*Space for Rough Work*

**SECTION - III****MENTAL ABILITY & REASONING**

31. If  $>$  denote  $+$ ,  $<$  denotes  $-$ ,  $\div$  denotes  $\div$ ,  $\wedge$  denotes  $\times$ ,  $-$  denotes  $=$ ,  $\times$  denotes  $>$  and  $=$  denotes  $<$ , choose the correct statement in the question given below.
- (A)  $14 > 18 + 9 = 16 + 4 > 1$  (B)  $4 > 3 \wedge 8 < 1 - 6 + 2 > 24$   
(C)  $3 < 6 \wedge 4 > 25 = 8 + 4 > 1$  (D)  $12 > 9 \wedge 3 < 6 \times 25 + 5 > 6$

**Direction : (32 to 33)** Study the following information to answer the given questions.

- (i) Eight friends A, B, C, D, E, F, G and H are seated in a circle facing centre.  
(ii) D is between B and G and F is between A and H.  
(iii) E is second to the right of A.
32. Which of the following is A's position ?  
(A) left of F (B) Right of F  
(C) Between E and F (D) can't be determined
33. Which of the following is C's position ?  
(A) Between E and A (B) Between G and E  
(C) Second to the left of B (D) Can't be determined
34. Pointing to a man in a photograph, Anita said "His brother's father is the only son of my grandfather" How is the Anita related to the man in the photograph ?  
(A) Mother (B) Aunt (C) Sister (D) Daughter
35. From point P, Akshay starts walking towards East. After walking 30 metres, he turns to his right and walks 10 metres. He then turns to his right and walks for 30 metres. He again turns to his right and walks 30 metres. How far is he from Point P and in which direction ?  
(A) Point P itself (B) 10 metres North  
(C) 20 metres West (D) 20 metres North
36. **Bank** is related to **Money** in the same way **Transport** is related to.  
(A) Goods (B) Road (C) Terrace (D) Floor

---

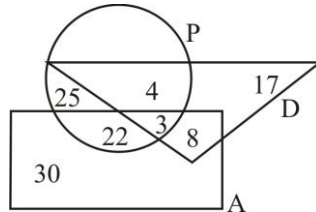
*Space for Rough Work*

**Directions :** (37) In The given questions, three out of the four alternatives are same in a certain way and so form a group. Find the odd one that does not belong to the group.

37. (A) Teeth (B) Tongue (C) Palate (D) Chin
38. If the alphabets were written in the reverse order, which letter will be the fifth letter to the right of the fourteenth letter from the left.  
 (A) R (B) I (C) S (D) H

**Directions :** (39 to 42) Study the following figure carefully and answer the questions :

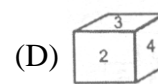
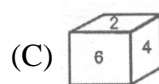
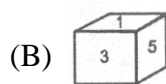
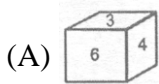
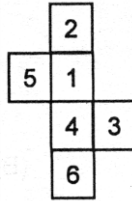
The triangle represented doctors. The circle represents players and the rectangle represents artists.



39. How many doctors are both players and artists ?  
 (A) 6 (B) 8 (C) 4 (D) 3
40. How many artists are players ?  
 (A) 30 (B) 29 (C) 25 (D) 17
41. How many artists are neither players nor doctors ?  
 (A) 29 (B) 30 (C) 22 (D) 8

*Space for Rough Work*

42. How many doctors are neither players nor artists ?  
 (A) 17 (B) 30 (C) 8 (D) 19
43. Karan was born on Saturday 22nd March 1982. On what day of the week was he 14 years 7 months and 8 days of age ?  
 (A) Sunday (B) Tuesday (C) Wednesday (D) Monday
44. How many times are the hands of a clock coincide in a day ?  
 (A) 10 (B) 11 (C) 12 (D) 22
45. Which of the following dices is identical to the unfolded figure as shown here ?




---

*Space for Rough Work*



**9<sup>TH</sup> CLASS TEST ID: 99016****ANSWERS**

---

1. (A)	2. (B)	3. (C)	4. (A)	5. (C)
6. (D)	7. (B)	8. (C)	9. (B)	10. (B)
11. (D)	12. (C)	13. (A)	14. (B)	15. (C)
16. (D)	17. (C)	18. (A)	19. (A)	20. (D)
21. (A)	22. (B)	23. (A)	24. (D)	25. (A)
26. (D)	27. (B)	28. (C)	29. (C)	30. (D)
31. (B)	32. (B)	33. (A)	34. (C)	35. (D)
36. (A)	37. (D)	38. (A)	39. (D)	40. (C)
41. (B)	42. (A)	43. (D)	44. (D)	45. (A)