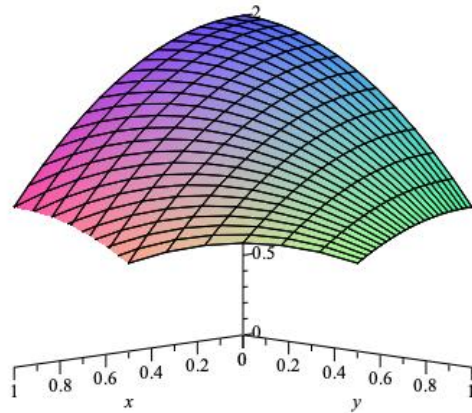


Calculus 3 - Volumes extra examples

Extra examples using double integrals to find the volume under a surface



where

$$V = \iint_R f(x, y) dA \quad (1)$$

where $dA = dx dy$ or $dy dx$.

Example 1. pg. 987, #24 Find the volume under the plane $z = 4 - x - y$ on the region bound by $y = x$, $x = 0$ and $y = 2$

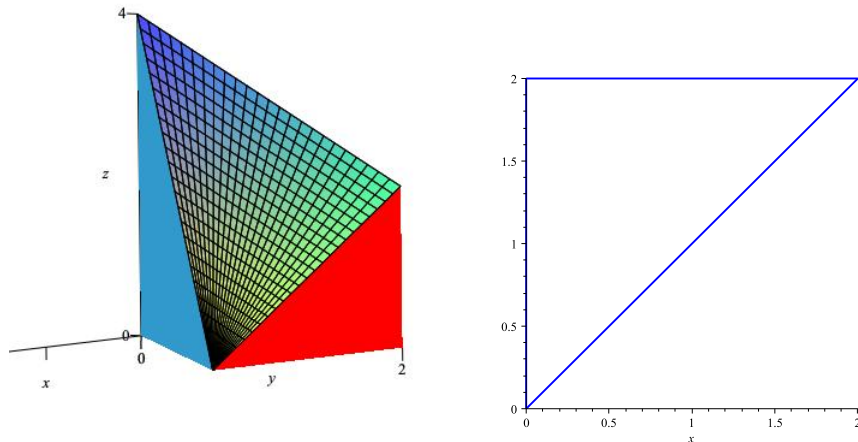


Figure 1: Region of integration

$$V = \int_0^2 \int_x^2 (4 - x - y) dy dx$$

or

$$V = \int_0^2 \int_0^y (4 - x - y) dx dy \quad (2)$$

Example 2. Find the volume under the paraboloid $z = 2 - x^2 - y^2$ and inside the cylinder $x^2 + y^2 = 1$, for $z \geq 0$

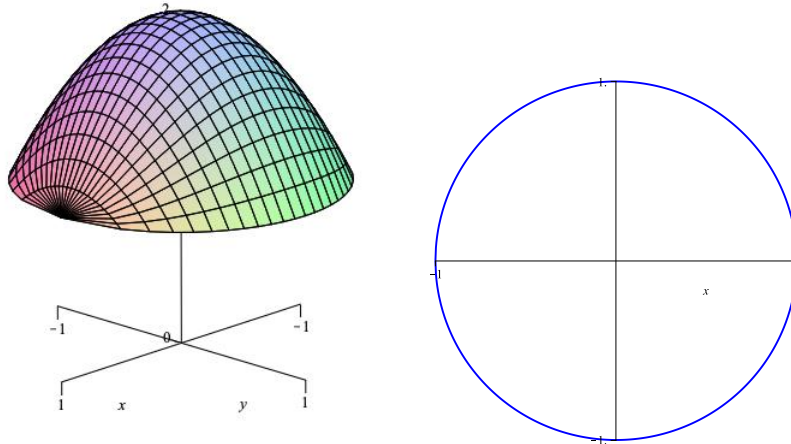


Figure 2: Region of integration

$$V = \int_{-1}^1 \int_{-\sqrt{1-x^2}}^{\sqrt{1-x^2}} (2 - x^2 - y^2) dy dx \quad (3)$$

or

$$V = \int_{-1}^1 \int_{-\sqrt{1-y^2}}^{\sqrt{1-y^2}} (2 - x^2 - y^2) dx dy \quad (4)$$

Due to symmetry

$$\begin{aligned} V &= 4 \int_0^1 \int_0^{\sqrt{1-x^2}} (2 - x^2 - y^2) dy dx \\ &= 4 \int_0^1 \left. 2y - x^2y - \frac{2}{3}y^3 \right|_0^{\sqrt{1-x^2}} dx \\ &= 4 \int_0^1 2\sqrt{1-x^2} - x^2\sqrt{1-x^2} - \frac{2}{3} \left(\sqrt{1-x^2} \right)^3 dx \quad (\text{trig sub } x = \sin \theta) \\ &= \frac{3\pi}{2} \end{aligned} \tag{5}$$

Polar Coordinates

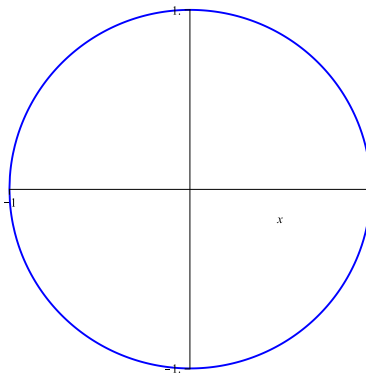
In calculus 2 we introduced polar coordinates where

$$x = r \cos \theta, \quad y = r \sin \theta \tag{6}$$

and

$$x^2 + y^2 = r^2, \quad \tan \theta = \frac{y}{x} \tag{7}$$

Let's talk about sweeping out the region



We see that

$$r = 0 \rightarrow 1, \quad \theta = 0 \rightarrow 2\pi \tag{8}$$

so what about this integral from the last example

$$V = \int_{-1}^1 \int_{-\sqrt{1-x^2}}^{\sqrt{1-x^2}} (2 - x^2 - y^2) dy dx. \quad (9)$$

How would it change if we used r and θ instead of x and y ? Would it become easier?

What about the volume under the half sphere $z = \sqrt{1 - x^2 - y^2}$

$$V = \int_{-1}^1 \int_{-\sqrt{1-x^2}}^{\sqrt{1-x^2}} \sqrt{1 - x^2 - y^2} dy dx. \quad (10)$$