

Draw lines to connect the problems to the correct answers.

7 + 1 •

6 + 4 •

2 + 3 •

1 + 3 •

0 + 9 •

3 + 4 •

0 + 1 •

1 + 1 •

1 + 2 •

4 + 2 •

0 + 0 •

• 0

• 1

• 2

• 3

• 4

• 5

• 6

• 7

• 8

• 9

• 10

Follow the problems that equal 10 to help the ringmaster find the circus tent.



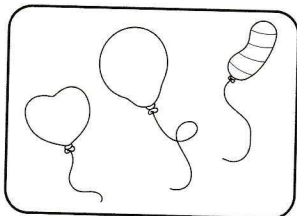
Start

$9 + 1$

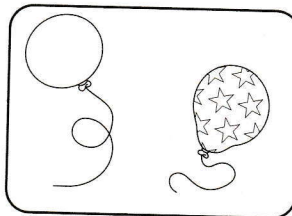
$8 + 2$

$7 + 2$

$1 + 5$



$7 + 3$



$3 + 3$


$2 + 6$

$3 + 2$

$5 + 5$

$4 + 6$

$1 + 7$



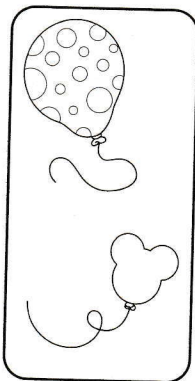
$1 + 9$

$4 + 4$

$3 + 7$

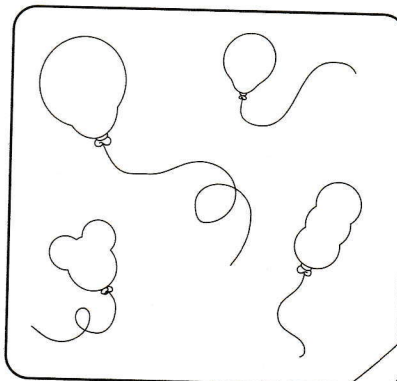
$10 + 0$

$2 + 8$



$1 + 4$

$5 + 5$




$7 + 2$

$1 + 8$

$4 + 6$

$9 + 1$



Finish