








Drawing Moon Phases

Using the description and matching words, complete worksheet by adding the drawing of that phase of the moon.

<p>1. New Moon Moon is almost directly between the sun and Earth (start of cycle).</p>	
<p>2. Waxing Crescent Moon A bit of the sunlit side of the moon shows on the right side.</p>	
<p>3. First Quarter Moon The moon is a quarter of its way around Earth. It is in its first quarter phase.</p>	
<p>4. Waxing Gibbous Moon The moon is increasing in light between a first quarter moon and a full moon.</p>	
<p>5. Full Moon Two weeks have passed since the new moon. We see the entire face of the moon shining.</p>	
<p>6. Waning Gibbous Moon The moon is decreasing in light between a full moon and a last quarter moon.</p>	
<p>7. Last Quarter Moon The moon is three-quarters of its way around Earth. It is in its last quarter phase.</p>	
<p>8. Waning Crescent Moon A bit of the waning sunlit side of the moon shows on the left side.</p>	