


scale exercises

Write the following scales by using the 2 tetrachords that form the scale.
Fill in the name of the tetrachords at the top of the scale.
Name the notes. Watch the clefs.


a) the scale with one accidental

Tetrachord Tetrachord




b) the scale with the top Tetrachord beginning on F

Tetrachord Tetrachord




c) the scale with the bottom Tetrachord beginning on E \flat

Tetrachord Tetrachord




d) the scale with the following flats: B \flat E \flat A \flat D \flat

Tetrachord Tetrachord




e) the scale with the top Tetrachord beginning on A \flat

Tetrachord Tetrachord



f) the scale with the bottom Tetrachord beginning on G \flat

Tetrachord Tetrachord



g) the scale with all 7 flats

Tetrachord Tetrachord

