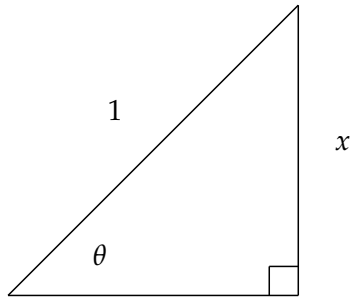


Right Angle Trigonometry

Suppose $x = \sin \theta$



$$\sin \theta = \frac{x}{1}$$

$$\cos \theta =$$

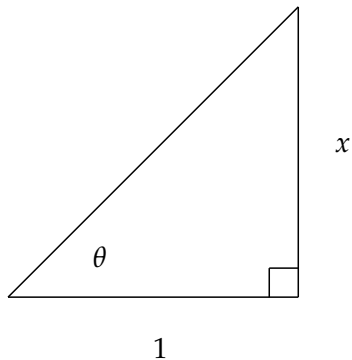
$$\tan \theta =$$

$$\cot \theta =$$

$$\sec \theta =$$

$$\csc \theta =$$

Suppose $x = \tan \theta$



$$\sin \theta =$$

$$\cos \theta =$$

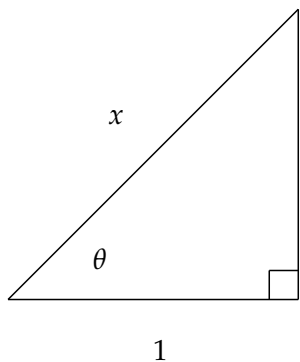
$$\tan \theta = \frac{x}{1}$$

$$\cot \theta =$$

$$\sec \theta =$$

$$\csc \theta =$$

Suppose $x = \sec \theta$



$$\sin \theta =$$

$$\cos \theta =$$

$$\tan \theta =$$

$$\cot \theta =$$

$$\sec \theta = \frac{x}{1}$$

$$\csc \theta =$$

To complete the missing side of the triangles use the Pythagorean Theorem $a^2 + b^2 = c^2$

Identities:

$$\sin^2 \theta + \cos^2 \theta = 1, \quad 1 + \tan^2 \theta = \sec^2 \theta, \quad 1 + \cot^2 \theta = \csc^2 \theta.$$

$$\sin 2\theta = 2 \sin \theta \cos \theta, \quad \cos 2\theta = \cos^2 \theta - \sin^2 \theta = 2 \cos^2 \theta - 1 = 1 - 2 \sin^2 \theta.$$

$$\sin^2 \theta = \frac{1}{2}(1 - \cos 2\theta), \quad \cos^2 \theta = \frac{1}{2}(1 + \cos 2\theta).$$