

Name \_\_\_\_\_

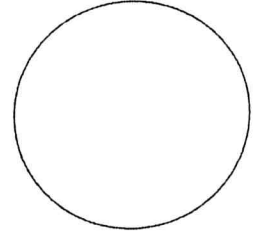
Date \_\_\_\_\_

# NIGHT-SKY LOG

Bring this sheet back to school on Friday morning.


**MONDAY** Date \_\_\_\_\_ Time \_\_\_\_\_

Observations \_\_\_\_\_  
\_\_\_\_\_  
\_\_\_\_\_  
\_\_\_\_\_



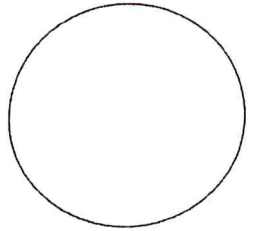
**TUESDAY** Date \_\_\_\_\_ Time \_\_\_\_\_

Observations \_\_\_\_\_  
\_\_\_\_\_  
\_\_\_\_\_  
\_\_\_\_\_




**WEDNESDAY** Date \_\_\_\_\_ Time \_\_\_\_\_

Observations \_\_\_\_\_  
\_\_\_\_\_  
\_\_\_\_\_  
\_\_\_\_\_



**THURSDAY** Date \_\_\_\_\_ Time \_\_\_\_\_

Observations \_\_\_\_\_  
\_\_\_\_\_  
\_\_\_\_\_  
\_\_\_\_\_



Name \_\_\_\_\_

Date \_\_\_\_\_

# PHASES OF THE MOON-2

The Moon orbits the Earth during a 4-week lunar cycle. Place in each box the phase of the Moon we see from Earth during the cycle and name the phase. Note where the Sun is.

