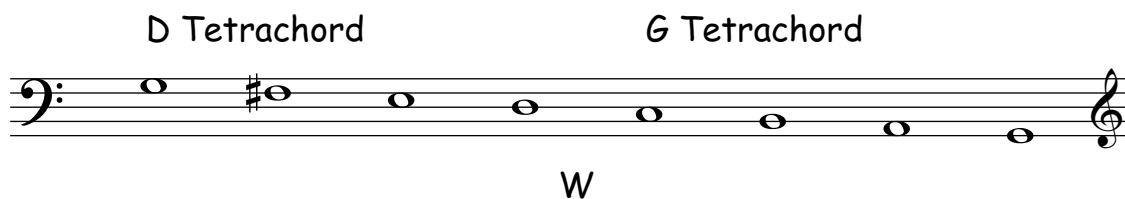


more scale ex. - ANSWERS

Name and write the following scale one octave using whole notes as indicated.
Name the tetrachords. Indicate the joining whole step with a W below the staff.


- a) scale with the 2nd note in the scale as A
descending

Scale: G+




- b) scale with the 3rd note in the scale as G#
ascending

Scale: E+




- c) scale with the 4th note in the scale as G
descending

Scale: D+




- d) scale with the 2nd last note in the scale as B#
descending

Scale: C#+




- e) scale with all sharps except B and E
descending

Scale: B+



- f) scale with leading note as E#
ascending

Scale: F#+



- g) scale with 2nd note in the scale as B
descending

Scale: A+

