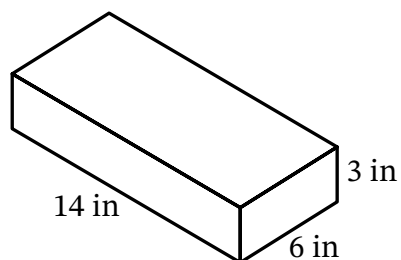




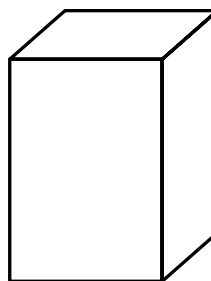
Name \_\_\_\_\_

Date \_\_\_\_\_

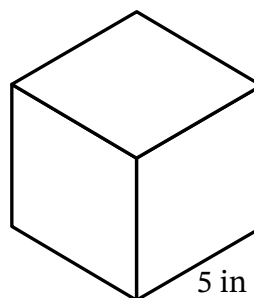
1. Which right rectangular prism has the greater volume?

**Prism A****Prism B**

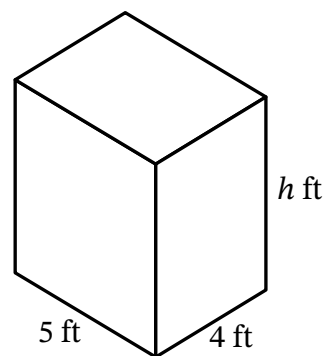
The area of the base is 20 square inches  
and the height is 12 inches.



2. Find the volume of the cube.



3. What is the height of the right rectangular prism?



The volume is 100 cubic feet.