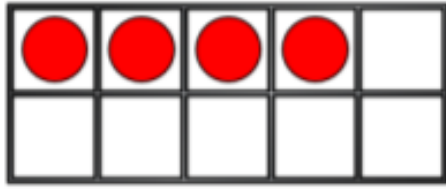
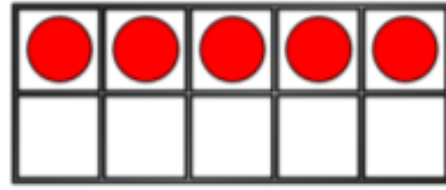


Use the ten frames to complete the number bonds to 10




$$4 + \underline{\quad} = 10$$



$$5 + \underline{\quad} = 10$$

Can you make the ten frame that comes before in the sequence?
Can you make the ten frame that comes next in the sequence?

All the ladybirds should have 10 spots.
Some of the ladybirds have lost their spots. Complete the spots and write the number sentences.



Dora has 10 p to spend.



5 p



6 p



4 p



5 p



6 p



4 p

Which two items could she buy?
How many different ways can she do it?