



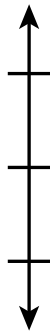
---

Name

---

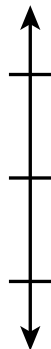
Date

1. Round 12.72 to the nearest tenth. Show your thinking on the number line.



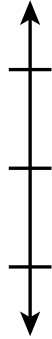
12.72  $\approx$  \_\_\_\_\_

- 
2. Round 4.935 to the nearest hundredth. Show your thinking on the number line.



4.935  $\approx$  \_\_\_\_\_

3. Round 27.96 to the nearest tenth. Show your thinking on the number line.



27.96  $\approx$  \_\_\_\_\_

- 
4. Round 9.492 to the nearest hundredth. Draw a number line to show your thinking.

9.492  $\approx$  \_\_\_\_\_