



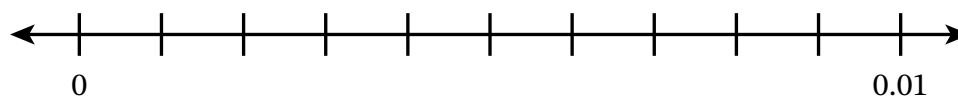
6

Name _____

Date _____

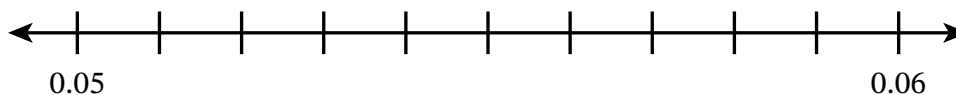
1. Complete the table. Then plot and label each number on the number line.

Unit Form	Fraction Form	Standard Form
8 thousandths		
3 thousandths		
9 thousandths		

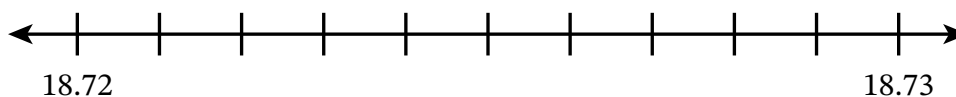


Plot and label each number on the number line. Then use $>$, $=$, or $<$ to compare the numbers.

2. 0.052 _____ 0.059



3. 18.721 _____ 18.72



Write each number in the place value chart. Then use $>$, $=$, or $<$ to compare the numbers.

4. 92.097 _____ 92.09

tens	ones	tenths	hundredths	thousandths

5. 1.488 _____ 14.88

tens	ones	tenths	hundredths	thousandths

6. Use $>$, $=$, or $<$ to compare the numbers.

8.605 _____ 8.65

7. Use the Compare Decimal Numbers Cards.

a. Use $>$, $=$, or $<$ to compare the numbers on each flip of the cards.

b. Order the numbers from least to greatest.