


more scale exercises

Name and write the following scale one octave using whole notes as indicated.
Name the tetrachords. Indicate the joining whole step with a W below the staff.

a) scale with the 2nd note in the scale as C
descending


Tetrachord Tetrachord



Scale:

b) scale with the 3rd note in the scale as C
ascending


Tetrachord Tetrachord



Scale:

c) scale with the 4th note in the scale as B \flat
descending


Tetrachord Tetrachord



Scale:

d) scale with the 2nd last note in the scale as B \flat
descending


Tetrachord Tetrachord



Scale:

e) scale with all flats except F and C
descending


Tetrachord Tetrachord



Scale:

f) scale with leading note as D
ascending

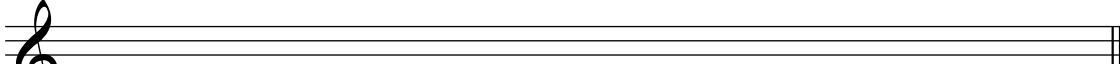
Tetrachord Tetrachord



Scale:

g) scale with 2nd note in the scale as A \flat
descending

Tetrachord Tetrachord



Scale: