


enharmonic equivalent and half step exercises

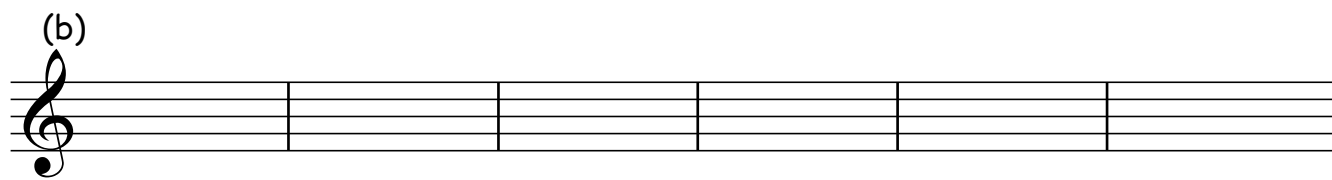
note: Chromatic Half Step (C hs) Diatonic Half Step (D hs) Enharmonic Equivalent (EE)

1 (a) Write the note and the enharmonic equivalent for each letter name. See bar 1.




F E# A \flat B C# C E \flat

(b)




E F# C \flat E# G \flat B#

(c)




D \flat A# B \flat D# F \flat G#

3. For each given letter name, write and name the C hs below, D hs above or EE as indicated. See bar 1.

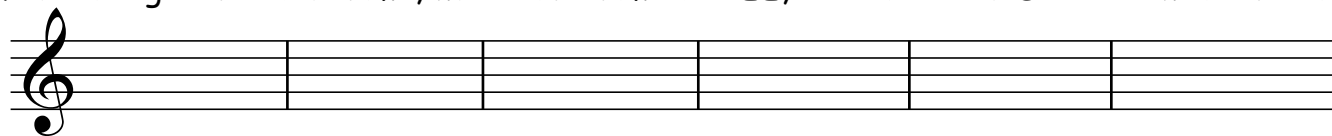


C \flat C# D# E F# G \flat A#
C hs D hs C hs D hs C hs EE



B C C D# E \flat F
C hs EE D hs C hs EE D hs

4 . For each given letter name, write and name the EE, C hs above or D hs below as indicated.



G \flat A# B D E B
EE D hs EE D hs EE C hs