

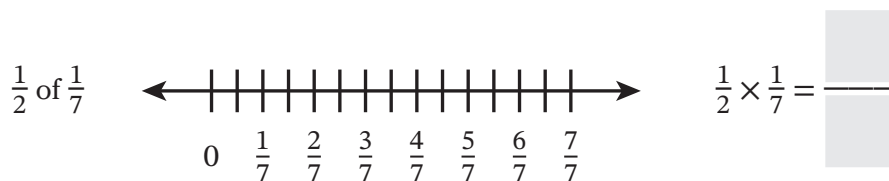


7

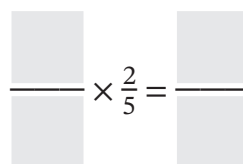
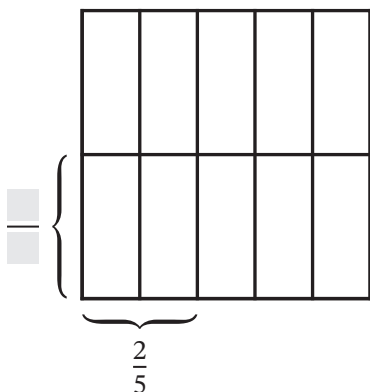
Name \_\_\_\_\_

Date \_\_\_\_\_

1. Use the number line to complete the multiplication equation.



2. Complete the area model to find the product. The area model represents 1.



3. Draw a model to find the product.

$$\frac{1}{6} \times \frac{2}{3} = \underline{\hspace{2cm}}$$