

Micrometer Test

Name: _____ Date: _____

Instructions: Read the following micrometer settings. Answer to three decimal places.



1. _____



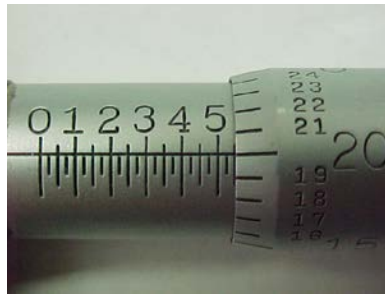
2. _____



3. _____




4. _____




5. _____



6. _____



7. _____



8. _____



9. _____



10. _____



11. _____



12. _____