




1

Name _____


Date _____



a. $\frac{1}{3}$ of 12 is _____.

b. $\frac{2}{3}$ of 12 is _____.


Use the array to find the value. Draw lines to show your work.



a. $\frac{1}{6}$ of 18 is _____.

b. $\frac{3}{6}$ of 18 is _____.

c. $\frac{5}{6}$ of 18 is _____.



a. $\frac{1}{5}$ of 15 is _____.

b. $\frac{2}{5}$ of 15 is _____.

c. $\frac{4}{5}$ of 15 is _____.

4. There are 20 people on a bus. $\frac{3}{5}$ of the people are adults. The rest are children.

a. How many adults are on the bus?

b. What fraction of the people on the bus are children?

c. How many people on the bus are children?

5. Julie has 16 balloons. $\frac{3}{8}$ of Julie's balloons are blue. How many of Julie's balloons are not blue?