



Each emoji represents a number. Find the number each emoji represents. Find the answer to the final calculation.

4.  ×  = 24



 -  = 2

 +  =



Each emoji represents a number. Find the number each emoji represents. Find the answer to the final calculation.

5.  ×  = 15



 +  = 8

 -  =



Each emoji represents a number. Find the number each emoji represents. Find the answer to the final calculation.

6.  ×  = 28

 -  = 3

 +  =



Each emoji represents a number. Find the number each emoji represents. Find the answer to the final calculation.

7.  ×  = 18

 +  = 11

 -  =