

Garia Academy (Model)

An English Medium Co-Educational Senior Secondary School
HQ. Garia Hathai, Atharabla
Udaipur, Gomati, Tripura
Class – III,

Subject – Mathematic Assignment Question & Solved Answer

Chapter – 6(Shape & patterns)

*** Have you seen these signs on the Road? What do they mean?



No Honking



Zebra Crossing



Two ways

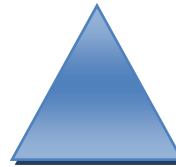
Basic Shapes: -




Rectangle



Square

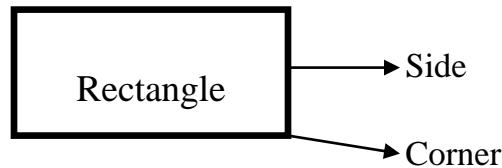


Triangle

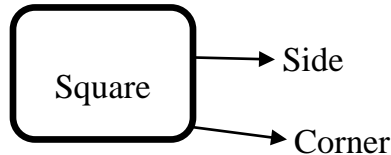


Circle

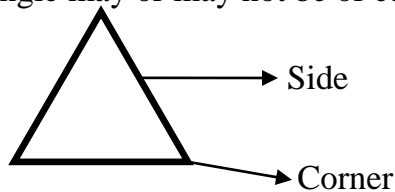
- **Important:** -The opposite sides are of equal length in a rectangle. A rectangle has 4 sides and 4 corners.




- **Important:** - All sides are equal length in a square. A square has 4 sides and 4 corners.



- **Important:** - The sides of a triangle may or may not be of equal length. A triangle has 3 sides and 3 corners.





- **Important:** - A circle has no sides and no corners.



Exercise - 6.1

A. Count the shapes and fill in the blanks: -

1.  There are [4] squares and [no] rectangles.

2.  There are [4] triangles.

3.  There are [3] rectangles.

Exercise - 6.2

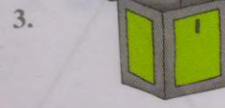
A. Name the solid shape.



Cylinder



Sphere

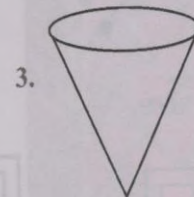

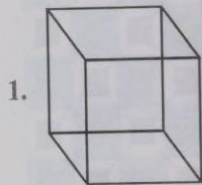


Cube



Cone

B. Colour the faces of the following in two different colours of your choice. [H/W]




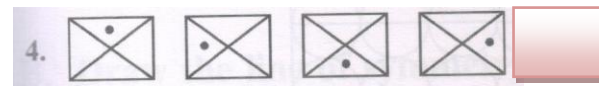
Exercise - 6.3

A. What will come next? Draw it.

1. 

Practice at home: - (2 to 8)





Exercise - 6.4

Q. A&B (Practice at home)

Q. C. Tables 1 to 10.