

---

## Lesson 7:

Multiply by using familiar methods.

CCSS Standard –5.OA.A.1 / 5.NBT.B.5

**FLUENCY** (10-min)

**Whiteboard Exchange: Word Form to Standard Form**



three thousand, eight hundred nineteen =

Word Form	Standard Form	Expanded Form
One million, two hundred twenty-three thousand, nine	1,223,009	$1,000,000 + 200,000 + 20,000 + 3,000 + 9$
Forty-three thousand, nine hundred seventy-one	43,971	$40,000 + 3,000 + 900 + 70 + 1$
Sixty-three thousand, five hundred eighty-nine	63,589	$60,000 + 3,000 + 500 + 80 + 9$

**FLUENCY** (10-min)

**Whiteboard Exchange: Word Form to Standard Form**



two thousand, four hundred seventy = **2,470**

four thousand, eighty-two = **4,082**

seven thousand, seven = **7,007**

fourteen thousand, two hundred ninety-five = **14,295**

twenty-five thousand, six hundred four = **25,604**

fifty thousand, one hundred three = **50,103**

eighty-six thousand, twenty = **86,020**

**FLUENCY** (10-min)**Whiteboard Exchange: Estimate Products**

$$1,832 \times 3 \approx \underline{\quad\quad\quad} \times 3$$

$$1,832 \times 3 \approx \underline{\quad\quad\quad}$$

What is 1,832 rounded to the nearest thousand?

This statement reads “1,832 x 3 is **about** 2,000 x 3”. Repeat this statement.

Now solve for 2,000 x 3.

$$8 \times 6,503 \approx 8 \times \underline{\quad\quad\quad}$$

$$8 \times 6,503 \approx \underline{\quad\quad\quad}$$

What is 6,503 rounded to the nearest thousand?

This statement reads “6,503 x 8 is **about** 7,000 x 8”. Repeat this statement.

Now solve for 7,000 x 8.

**FLUENCY** (10-min)**Whiteboard Exchange: Estimate Products**

$$2,371 \times 4 \approx \underline{\quad\quad\quad} \times 4$$

$$2,371 \times 4 \approx \underline{\quad\quad\quad}$$

What is 2,371 rounded to the nearest thousand?

This statement reads “2,371 x 4 is **about** 2,000 x 4”. Repeat this statement.

Now solve for 2,000 x 4.

$$5 \times 3,290 \approx 5 \times \underline{\quad\quad\quad}$$

$$5 \times 3,290 \approx \underline{\quad\quad\quad}$$

What is 3,290 rounded to the nearest thousand?

This statement reads “3,290 x 5 is **about** 3,000 x 5”. Repeat this statement.

Now solve for 3,000 x 5.

**FLUENCY** (10-min)

**Whiteboard Exchange: Estimate Products**



$$6 \times 5,901 \approx 6 \times \underline{\hspace{2cm}}$$

$$6 \times 5,901 \approx \underline{\hspace{2cm}}$$

What is 5,901 rounded to the nearest thousand?

This statement reads “5,901 x 6 is **about** 6,000 x 6”. Repeat this statement.

Now solve for 6,000 x 6.

$$5,075 \times 7 \approx \underline{\hspace{2cm}} \times 7$$

$$5,075 \times 7 \approx \underline{\hspace{2cm}}$$

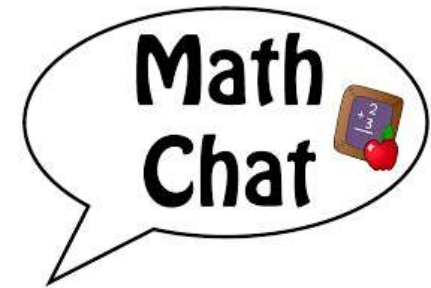
What is 5,075 rounded to the nearest thousand?

This statement reads “5,075 x 7 is **about** 5,000 x 7”. Repeat this statement.

Now solve for 5,000 x 7.

**LAUNCH** (10-min)

Students represent a five-digit number using models and expressions.

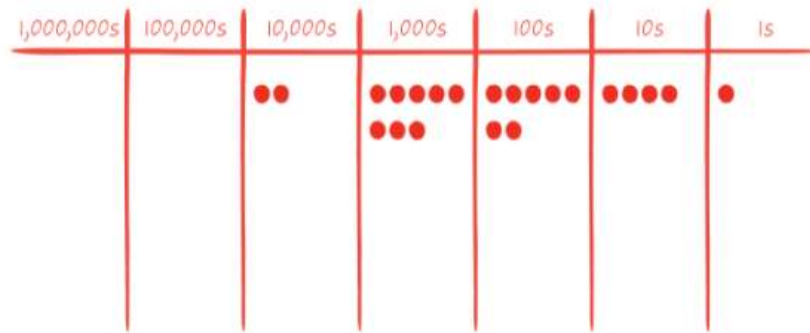


Write the following number **in as many ways as you can!** **28,741**



Shhhhh!

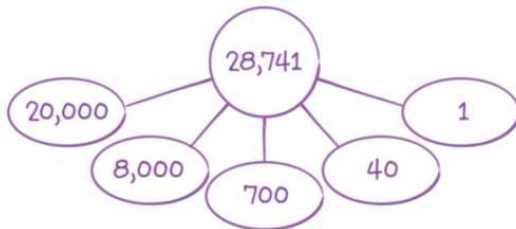
Place Value Chart



Expanded Form

$$20,000 + 8,000 + 700 + 40 + 1$$

Number Bond

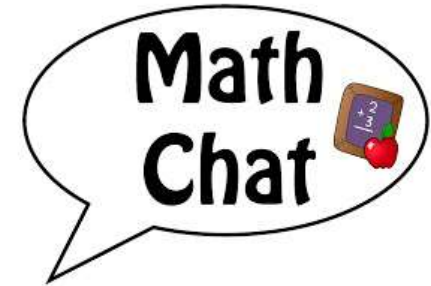


Expanded Form with Multiplication

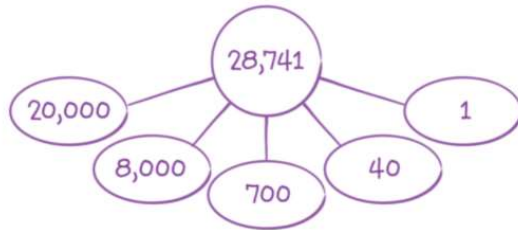
$$(2 \times 10,000) + (8 \times 1,000) + (7 \times 100) + (4 \times 10) + (1 \times 1)$$

**LAUNCH (10-min)**

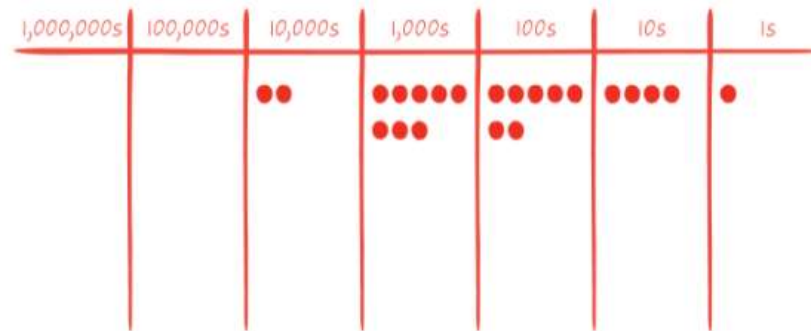
Students represent a five-digit number using models and expressions.



Number Bond



Place Value Chart



Expanded Form

$$20,000 + 8,000 + 700 + 40 + 1$$

Expanded Form with Multiplication

$$(2 \times 10,000) + (8 \times 1,000) + (7 \times 100) + (4 \times 10) + (1 \times 1)$$

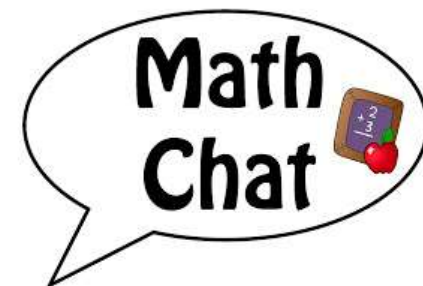
What is similar about how **28,741** is decomposed in each example? **each example uses place value!**

How are expanded form and expanded form with multiplication similar / different?



**LAUNCH** (10-min)

Students represent a five-digit number using models and expressions.



$$(4 \times 10) + (8 \times 1,000) + (1 \times 1) + (2 \times 10,000) + (7 \times 100)$$

40

8,000

1

20,000

700

Does this example also represent 28,741?


**Yes!!!**

It has the same number of ten thousands, thousands, hundreds, tens, and ones.

They are just added in a different order.

**LEARN** (30-min)

Select a Method to Multiply



On a typical day, a grade 5 student takes **24,165 breaths in one day!**


How many breaths will **you and 5 friends** take in one day?



There are several different ways that you could solve this problem.  
Use the Read-Write-Draw Method to connect your drawing to the story.  
Be ready to explain your method!

**LEARN** (30-min)

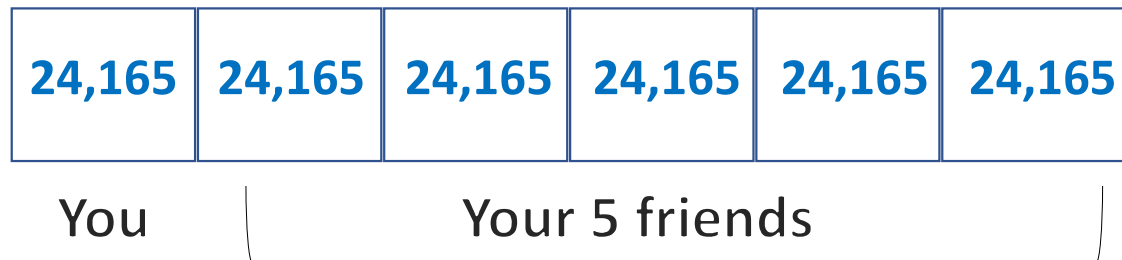
Select a Method to Multiply



On a typical day, a grade 5 student takes **24,165 breaths in one day!** How many breaths will **you and 5 friends** take in one day?

Let's start by **re-reading** the problem carefully.  
Next – let's draw a **tape diagram**.

*Why do you think I drew 6 boxes?*



*What expression will solve this problem?*

**6 x 24,165**

*Unlike prior lessons, we ACTUALLY have to solve this problem. Estimating will help us to know if our final answer is correct.*

**LEARN** (30-min)

Select a Method to Multiply

**6 x 24,165**

**Estimate:**

**6 x 20,000 = 120,000**  
120,000 breaths is a  
good estimate.

## Break Apart Method:

$$\begin{aligned}6 \times 24,165 &= 6 \times (20,000 + 4,000 + 100 + 60 + 5) \\ &= (6 \times 20,000) + (6 \times 4,000) + (6 \times 100) + (6 \times 60) + (6 \times 5) \\ &= 120,000 + 24,000 + 600 + 360 + 30 \\ &= 144,990\end{aligned}$$

*Notice in this method how the 6 is distributed to **each place value**.*

*Pros – Mental Math*

*Cons – A lot to write; multiplication and addition are needed, neatness matters*

**LEARN** (30-min)

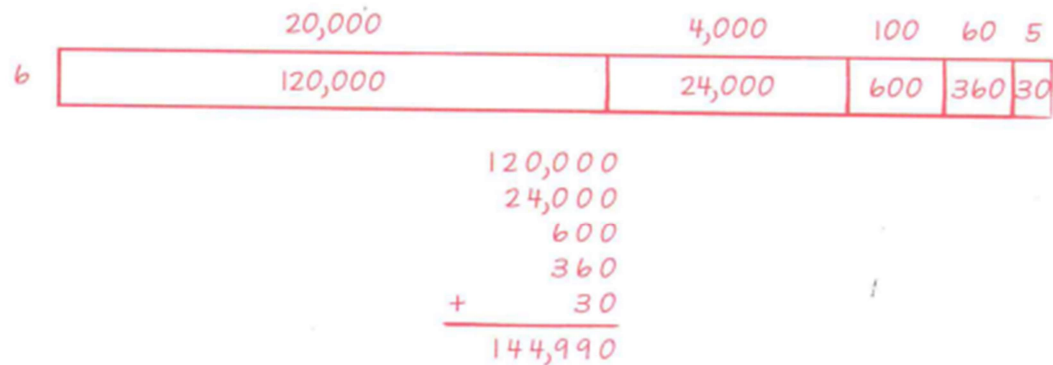
Select a Method to Multiply

$$6 \times 24,165$$

**Estimate:**

$6 \times 20,000 = 120,000$   
120,000 breaths is a  
good estimate.

## Area Model Method:



*Notice in this method how the 6 is also distributed to **each place value** but this time there is a box around each value.*

*Pros – Mental Math*

*Cons – Have to draw boxes; multiplication and addition, takes time*

**LEARN** (30-min)

Select a Method to Multiply

$$6 \times 24,165$$

**Estimate:**

$6 \times 20,000 = 120,000$   
120,000 breaths is a  
good estimate.

## Partial Products Method:

$$\begin{array}{r} 24,165 \\ \times \quad 6 \\ \hline 30 \\ 360 \\ 600 \\ 24,000 \\ + 120,000 \\ \hline 144,990 \end{array}$$

*Notice in this method how the 6 is also distributed to **each place value** but this time each value is written underneath.*

*Pros – Mental Math*

*Cons – Line up the zero mistakes; multiplication and addition, takes time*

**LEARN** (30-min)

Select a Method to Multiply

$$6 \times 24,165$$

**Estimate:**

$6 \times 20,000 = 120,000$   
120,000 breaths is a  
good estimate.

## Standard Algorithm Method:

$$\begin{array}{r} 24,165 \\ \times \quad 6 \\ \hline 144,990 \end{array}$$

*Notice this method is very simple looking.*

*Pros – Fast!!!!*

*Cons – You really need to have a command of your basic facts.*

**LEARN (30-min)**

**Select a Method to Multiply**

**Break Apart and Distribute**

$$\begin{aligned} 6 \times 24,165 &= 6 \times (20,000 + 4,000 + 100 + 60 + 5) \\ &= (6 \times 20,000) + (6 \times 4,000) + (6 \times 100) + (6 \times 60) + (6 \times 5) \\ &= 120,000 + 24,000 + 600 + 360 + 30 \\ &= 144,990 \end{aligned}$$

**Area Model**



$$\begin{array}{r} 120,000 \\ 24,000 \\ 600 \\ 360 \\ + 30 \\ \hline 144,990 \end{array}$$

**Standard Algorithm**

$$\begin{array}{r} 24,165 \\ \times \quad 6 \\ \hline 144,990 \end{array}$$

**Partial Products**

$$\begin{array}{r} 24,165 \\ \times \quad 6 \\ \hline 30 \\ 360 \\ 600 \\ 24,000 \\ + 120,000 \\ \hline 144,990 \end{array}$$


Select a method to solve the following problem:

**4 times as much as 32,157**



**LAND** (10-min)

**Exit Ticket**



Multiply. Show or explain your strategy.

$$73,613 \times 5$$

After Exit Ticket:

Work on Problem Set  
page 63 in workbook.

**Small Group Time:**

Page 62 workbook