
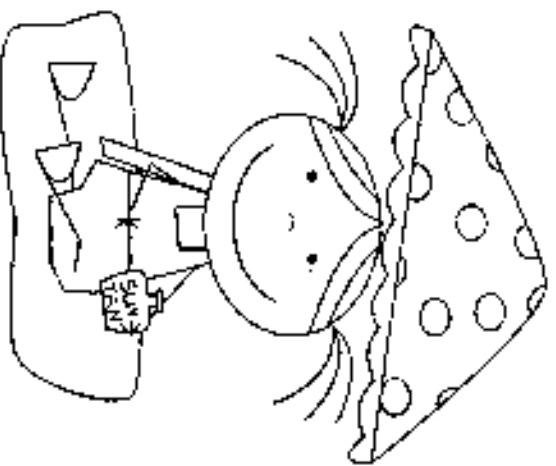



Summer

Practice

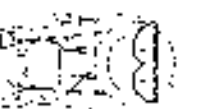
Packet




Name:



Fun



<p>Monday</p> <p>Practice counting to 100 by ones and tens.</p> <p>K.CC.A.1</p>	<p>Tuesday</p> <p>Fill in the blank with a rhyming word. hat, bat, cat, ___</p> <p>R.F.K.2a</p>	<p>Wednesday</p> <p>Write your numbers 0 to 20.</p> <p>K.CC.A.3</p>	<p>Thursday</p> <p>Write your alphabet using capital letters.</p> <p>L.K.3a</p>	<p>Friday</p> <p>If I have five crabs and two more crawled up, how many crabs do I have in all?</p> <p>K.OA.A.2</p>
<p>Look outside. List five nouns that you see.</p> <p>L.K.1b</p>	<p>There are two sandcastles on the beach. The water washes away one of them. How many are left?</p> <p>K.OA.A.2</p>	<p>Read a story with a friend or family member. Tell them the author and the illustrator of the book. What do they do?</p> <p>R.L.K.6</p>	<p>How many?</p>  <p>K.CC.B.5</p>	<p>Read the following words: the she of my to is you are</p> <p>R.F.K.3c</p>
<p>Draw 15 crabs</p> <p>K.OC.A.3</p>	<p>Read a story with a friend or family member. Tell what happened in the beginning, middle, and end of the story.</p> <p>R.L.K.2</p>	<p>Solve</p> <p>5 = ___ + ___</p> <p>K.OA.A.3</p>	<p>Read the following words: the she of my to is you are</p> <p>R.F.K.3c</p>	<p>How many tens and ones?</p> <p>18 = <u> </u> tens + <u> </u> ones</p> <p>K.NE.T.A.1</p>
<p>Write a short story telling about what you have done since the summer has began.</p> <p>L.K.1b</p>	<p>Solve:</p> <p>5+5= 3+3=</p> <p>4+3= 4+4=</p> <p>2+2= 7+2=</p> <p>1+8= 2+1=</p> <p>2+3= 8+2=</p> <p>4+2= 5+2=</p> <p>K.OA.A.3</p>	<p>Write your alphabet using lower case letters</p> <p>L.K.3a</p>	<p>Circle the words that rhyme</p> <p>Hand, Band or Frog, Fan</p> <p>R.F.K.2a</p>	



July



Monday

With the help of a family member, write a story on the computer and print it to hang up in your house.

W.K.6

Tuesday

If you have five kids at the park and two walk away, how many do you have left at the park?

K.OA.A.2

Wednesday

What is the role of an author and illustrator?

RL.K.5

Thursday

Solve:

$7 + \underline{\quad} = 10$

$2 + \underline{\quad} = 10$

$5 - \underline{\quad} = 10$

K.OA.A.4

Friday

Read a story with a friend or family member. Show them the front cover, the back cover, and the title page of the book.

RL.K.5

Count from 5 to 20

K.CC.A.2

Read a story with a friend or family member. Have them ask you questions about the story

RL.K.1

Solve:
1+4= 3+2=
2+3= 0+0=
5+0= 0+5=
0+5= 4+1=

K.OA.A.5

Read a story with a friend or family member. Please tell them the characters, setting, and the major events in the story?

RL.K.3

How many?



K.CC.B.5

How do you make these words plural?

Dog= _____

Wish= _____

LK.1c

Draw and label your favorite shapes.

K.G.A.2

What is wrong with this sentence?

the boy watched a movie in the evening

LK.2a

How many tens and ones?

$13 = \underline{\quad} \text{ tens} + \underline{\quad} \text{ ones}$


K.ND.A.1

What goes at the end of this sentence?

I would like to go to the beach

LK.2b

Is this shape flat or a solid?



K.G.A.3

Research some information on your favorite bug and draw a picture and list some information about it.

W.K.2

Is the circle above, below, or beside the square?



K.G.A.1

Read a story with a friend or with family and write a piece telling whether you liked it or not. Make sure you tell the title and author.

W.K.1

How many sides and corners does this shape have?



K.G.B.4



August



Monday

Draw or create two and three dimensional shapes using paper or items that you can find near you.

K.G.8.5

Tuesday

With a parent or friend, write a story about something fun you have done this summer.

W.K.8

Wednesday

Choose a friend or family member to help you. When you two stand next to each other, which one is taller?

K.MD.A.2

Thursday

Use your writing from Tuesday and use a digital tool (Computer) to publish your writing.

W.K.3

Friday

Draw 2 triangles. Is there a way that you can put them together to make a rectangle?

K.G.B.6

Practice writing some interrogative (who, what, when, where, why, and how) sentences.

L.K.1e

There are ten spiders in the tree. Two spiders jump into the water. How many spiders are left.

K.OA.A.2

Have a family member call out some words and you practice spelling them on your own.

L.K.2d

Solve
 $2 + \underline{\quad} = 10$

K.OA.A.3

Gather ten items around your house. Practice sorting them into groups. Discuss how you sorted them.

L.K.5a

Draw two groups of objects. Tell which one is greater than the other.

K.CC.C6

Do walk and march mean the same thing? Discuss and act out.

L.K.5d

Gather some objects. Practice counting to 100 by tens and ones.

K.CC.B.4a

Finish this sentence and continue.
My favorite summertime activity is _____

L.K.1f

Go on a shape hunt in your house or outside. Draw a picture of the shape and label them.

K.G.B.5

Complete:

- I went _____ the store.
- I went _____ a walk.
- I went to the movies _____ film.

L.K.1f

Solve:

$$5 = \underline{\quad} + \underline{\quad}$$

$$\underline{\quad} + \underline{\quad} = 5$$

$$\underline{\quad} + \underline{\quad} = 5$$

$$\underline{\quad} + \underline{\quad} = 5$$

$$\underline{\quad} + \underline{\quad} = 5$$

$$\underline{\quad} + \underline{\quad} = 5$$

K.OA.A.4

Draw a picture and label your favorite foods.

SL.K.5

Use objects to help you solve the following problems.

$$2+8=$$

$$6+4=$$

$$11+3=$$

$$7+5=$$

$$3+4=$$

$$1+9=$$

$$2+3=$$

$$14+4=$$

$$12+5=$$

$$12+2=$$

K.OA.A.1

Practice writing your alphabet. Then practice saying the sounds of each letter.

RF.K.3a

My Summer Reading Log

DATE:

TITLE:

AUTHOR:

DATE:

TITLE:

AUTHOR:

NAME: _____
I HAVE READ A
TOTAL OF _____
BOOKS

