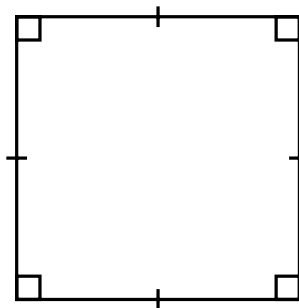
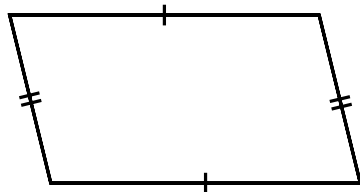
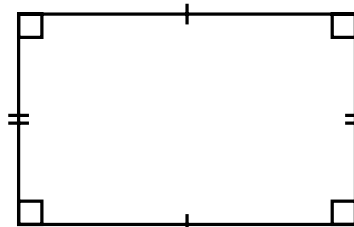
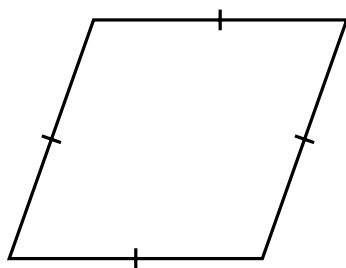




Name

Date

1. Consider the quadrilaterals shown.
 - a. Circle each quadrilateral that is a rhombus.
 - b. Draw an X on each quadrilateral that is a rectangle.



-
2. When can a parallelogram be classified as a rhombus?

-
3. When can a parallelogram be classified as a rectangle?