



Name: _____

Date: _____

Problem Sum Worksheet


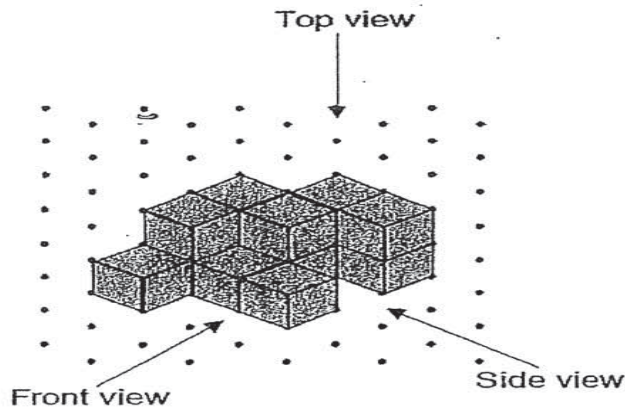
Topic : 3D Views

Video Solution: <https://www.omyclassroom.com/3d-view-56.html>




Qn 1 (Difficulty: Medium)

Study the following solid. Draw its front view and side view on the square grids below.



Front View



Side View