


Sail into Summer with Math!



www.kids-fun-and-games.com © Copyright 2010

For Students Completing Fourth Grade

This summer math booklet was developed to provide students in fourth grade an opportunity to review grade level math objectives and to improve math performance.

Sail into Summer with Math!

Dear Parents and Students,

These activities are varied and meant to show how much fun and relevant math can be in everyday life. There are activities that can be done throughout vacation, at the pool, at a restaurant, on the beach, etc.

At least three activities should be done each week. The activities should be done in a small notebook or on separate sheets of paper organized in a folder. One problem solving activity from the problem solving section should also be completed each week. Parents and students should discuss the activities, and parents should check to see if the activities have been completed correctly.

Have a great time “sailing into summer with math!”

Week 1

1. How old will you be on July 4, 2028?



2. Find examples of different polygons in magazines and catalogs. Make a collage. Label your shapes.

3. Look at the stripes on the American flag. What fraction represents the number of red stripes? What fraction represents the number of white stripes?

4. Draw clocks to show the following times:

11:05

10:20

6:55

7:40

12:15

3:10

5. Find the quotient of the following problems.

$81 \div 9 =$

$72 \div 9 =$

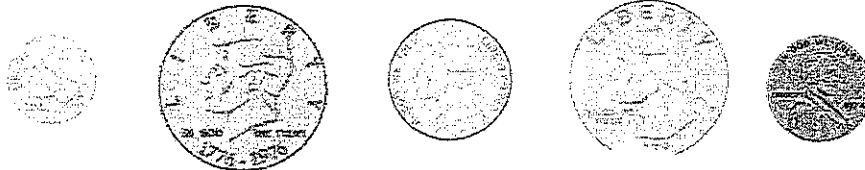
$64 \div 8 =$

$0 \div 1 =$

$56 \div 7 =$

$63 \div 9 =$

6. List ten different combinations of coins total exactly \$0.51?



Week 2

1. Make a set of multiplication flash cards or use a set you already have to complete this activity. Set a timer for three minutes. See how many facts you can answer correctly in three minutes. Do this for five days. Use a chart to keep track of your data. Make a bar graph showing your results.

2. Draw a picture to show the following fractions: $\frac{1}{2}$ $\frac{1}{4}$ $\frac{3}{4}$ $\frac{2}{3}$

3. Consider the number 812,763.

Write the number that is:

One greater _____

One less _____

1,000 greater _____

10,000 less _____

4. List fifteen different ways can you create \$1.00 using only coins.

5. If you toss a penny ten times, how many times do you predict it will come up heads? Why? Toss the penny ten times and state whether your prediction was correct.



6. Estimate the following in inches:

your height

length of your foot

distance from your elbow to the tip of your little finger

Measure to see how close your estimates were.

Week 3

1. Illustrate the following types of lines
 horizontal vertical perpendicular
 intersecting parallel

2. List all of the two place decimals between 5.01 and 5.1

3. Write and solve.

$$\begin{array}{r} 28 \\ \times 4 \\ \hline \end{array}$$

$$\begin{array}{r} 66 \\ \times 11 \\ \hline \end{array}$$

$$\begin{array}{r} 200 \\ \times 5 \\ \hline \end{array}$$

$$\begin{array}{r} 1300 \\ \times 24 \\ \hline \end{array}$$

$$\begin{array}{r} 600 \\ \times 14 \\ \hline \end{array}$$

$$\begin{array}{r} 999 \\ \times 0 \\ \hline \end{array}$$

4. Look in magazines and newspapers to find an example of a circle graph, a bar graph, and a line graph. Explain how each is used differently.


5. Use a clock to tell how many minutes are in the following parts of an hour.

$\frac{1}{6}$

$\frac{1}{3}$

$\frac{1}{2}$

$\frac{1}{4}$



6. List in order from least to greatest.

1

$\frac{1}{2}$

$\frac{2}{3}$

$\frac{1}{4}$

$\frac{5}{6}$

Summer Mathematics Packet

Week 4

1. Taylor has 4 coins. The total value is 35¢. What coins does he have?
2. Would you use kilometers, meters, or centimeters to measure each of the following?

Distance from your house to your school _____
Distance around your room _____
Length of a pencil _____
Length of a swimming pool _____
Length of a bicycle _____
Distance you traveled on your vacation _____

3. Use tape or chalk to make a number line on the sidewalk. Make 0 at the starting point and 1 at the end. Practice jumping on the number line to show where the following fractions are located:

$\frac{1}{2}$ $\frac{1}{3}$ $\frac{3}{4}$ $\frac{2}{3}$ $\frac{1}{4}$

Now draw a number line on paper and label those fractions.

4. Ask family and friends what their favorite summer activity is. Use a tally chart to collect your data. Make a graph of your choice to show the results. Share your graph with your family.

5. Add or subtract.

$$\begin{array}{r} 1,213 \\ + 681 \\ \hline \end{array}$$

$$\begin{array}{r} 997 \\ - 142 \\ \hline \end{array}$$

$$\begin{array}{r} 528 \\ + 315 \\ \hline \end{array}$$

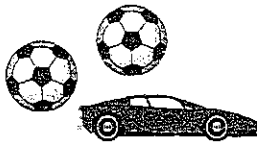
$$\begin{array}{r} 748 \\ - 206 \\ \hline \end{array}$$

Week 5

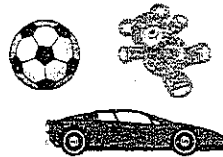
1. Write these numerals in order from least to greatest.

1,243 10,243 1,432 102,043 1,023


2. Look at the three sets of toys below. What members of Meghan's set are also in Marc's set? What members of Brian's set are not in either Meghan's or Marc's?



Meghan



Marc



Brian

3. Draw a picture to show $\frac{11}{4}$. What mixed numeral is another name for $\frac{11}{4}$?

4. Round each of the following numbers to the nearer hundred.

7,342 959 8,099 5,043 439 562

5. Look at a supermarket flyer to locate two items advertised that can be purchased for under \$5.00. Pretend you purchased those items and give the cashier a five-dollar bill. What change would you get back?

6. Multiply or divide.

$$\begin{array}{r} 2,476 \\ \times 9 \\ \hline \end{array}$$

$$\begin{array}{r} 12,098 \\ \times 6 \\ \hline \end{array}$$

$$\begin{array}{r} 46,109 \\ \times 8 \\ \hline \end{array}$$

$$\begin{array}{r} 7,056 \\ \times 10 \\ \hline \end{array}$$

$$3,678 \div 4$$

$$6,209 \div 7$$

$$8,099 \div 5$$

$$3,007 \div 2$$

Summer Mathematics Packet

Week 6

1. Help your mother or father bake a batch of cookies. Measure the ingredients yourself.
2. Use a “number generator” for this activity (such as dice). Predict how many times you will roll a six if you roll the number generator 24 times. Test your prediction.

3. Add or subtract.

$$\begin{array}{r} \$7.10 \\ - 3.60 \\ \hline \end{array}$$

$$\begin{array}{r} \$3.00 \\ - 2.17 \\ \hline \end{array}$$

$$\begin{array}{r} \$10.00 \\ - 7.35 \\ \hline \end{array}$$

$$\begin{array}{r} \$8.50 \\ - 2.15 \\ \hline \end{array}$$


$$\begin{array}{r} \$4.12 \\ + 6.18 \\ \hline \end{array}$$

$$\begin{array}{r} \$12.67 \\ + 8.54 \\ \hline \end{array}$$

$$\begin{array}{r} \$43.78 \\ + 23.72 \\ \hline \end{array}$$


$$\begin{array}{r} \$309.12 \\ + 33.88 \\ \hline \end{array}$$

4. Lauren opened her math book to study addition. She noticed that the number of pages she turned to had a sum of 67. What pages did she open to?



5. How many lines of symmetry does a circle have? Explain your thinking.

6. Draw your own comic strip about time.



Week 7. Write and solve.

$$\begin{array}{r} 4,300 \\ + 7,921 \\ \hline \end{array}$$

$$\begin{array}{r} 9,000 \\ - 7,344 \\ \hline \end{array}$$

$$\begin{array}{r} 420 \\ \times 35 \\ \hline \end{array}$$

$$3,111 \div 71$$

$$817 \div 9$$

$$7 \times 6 \times 1 \times 9$$

$$\begin{array}{r} 200 \\ - 93 \\ \hline \end{array}$$

$$\begin{array}{r} 318 \\ \times 46 \\ \hline \end{array}$$

$$\begin{array}{r} 626 \\ \times 41 \\ \hline \end{array}$$

$$\begin{array}{r} 900 \\ \times 25 \\ \hline \end{array}$$

$$\begin{array}{r} 8,424 \\ - 7,424 \\ \hline \end{array}$$

$$\begin{array}{r} 60 \\ 30 \\ + 19 \\ \hline \end{array}$$

2. Write a mixed numeral for each improper fraction below.

$\frac{21}{5}$	$\frac{17}{3}$	$\frac{14}{6}$	$\frac{28}{3}$
----------------	----------------	----------------	----------------

3. Collect data from family and friends about their favorite ice cream. Create a bar graph to show your results.

4. Calculate how many miles you traveled on your vacation.

5. Design a symmetrical robot that would do your math homework for you. Describe what function keys your robot would have.

Problem Solving

1. The fourth grade teachers ordered cooked crabs for their classes. Instead of getting whole crabs, they received pincers and legs only. Each crab has 8 legs and 2 pincers. Before feasting on the legs and pincers, they began to wonder how many whole crabs must have been cooked to provide them with 80 legs and 20 pincers. They decided if they drew pictures, they could find out how many whole crabs had been cooked. Draw a picture to solve this problem.

2. The fourth grade classes are going to have a crab feast in the all-purpose room. There will be a total of 30 tables which are of two types. The first type seats two people at each table, the second type seats five people at each table. If 81 students are seated and all of the tables are filled, how many tables of two are there? (*Hint – draw a picture*)



3. The 4 fourth grade classes sat quietly in the all-purpose room waiting for an assembly to begin. Use the clues below to determine the order in which the fourth graders are seated.

Mrs. Moore-Vernon's class was sitting the nearest to Mr. Graham's class.


There was no class sitting behind Mrs. Brown's class.

Ms. LeMaster's class was between two other fourth grade classes.

Mrs. Moore-Vernon's class was closest to the stage.

Explain how you found your answer. What strategy did you use?

4. The oriole is the state bird of Maryland. When it gets cold, they need to migrate to a warmer place. Their destination is a 1,000 miles away. If the birds fly 50 miles in a day, how many days will it take them to fly to their winter home? What strategy did you use to solve this problem?

5. Keshia was in her yard one day when she noticed some beautiful flowers. She noticed that they were Black-eyed Susans, the state flower of Maryland. She noticed the black center and twelve yellow petals. Keshia picked three of the flowers and placed them in a vase to bring to school. After two days, Keshia noticed that $\frac{1}{3}$ of the petals had fallen off. The following day, $\frac{1}{4}$ of the remaining petals had fallen off. The next day, $\frac{1}{2}$ of the remaining petals had fallen off. How many petals were left on the flowers?
6. Find all of the possible four digit numbers you can make using a 3, 7, 8, and 9. How many numbers can you make? What is the largest number you can make? What is the smallest number?
7. George was celebrating his tenth birthday with an ice cream party for his friends. He had chocolate, vanilla, and strawberry ice cream. He had chocolate syrup, rainbow sprinkles, chocolate chips, and m&m's for toppings. If each child was allowed to have two scoops of ice cream and one topping, what are all of the different kinds of sundaes that could be made?
- 
8. Patrick and Brendon play on different baseball teams, but sometimes use the same field. Patrick plays at Seneca Field every third game and Brendon plays at Seneca Field every fifth game. If Patrick and Brendon are both playing at Seneca Field today, when will be the next time they will be there on the same day?

